

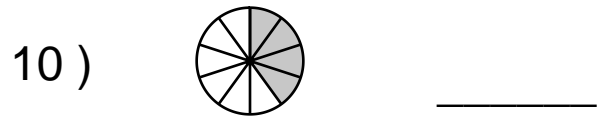
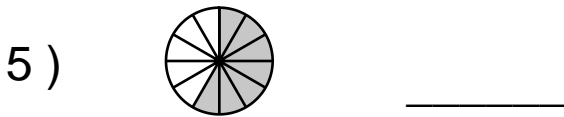
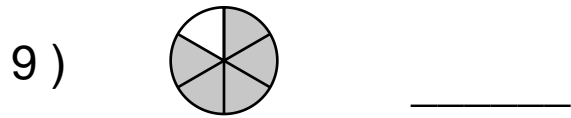
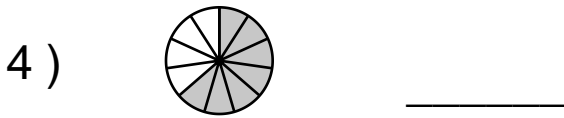
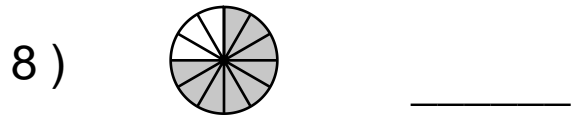
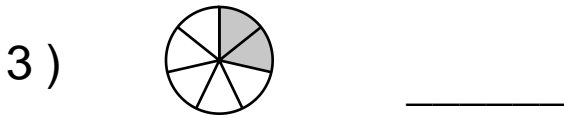
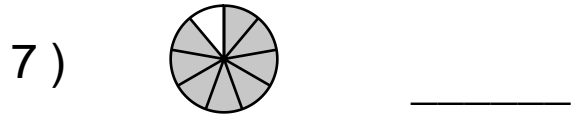
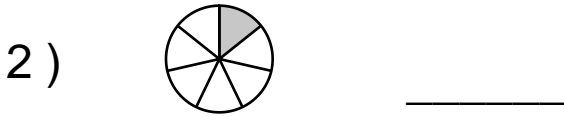
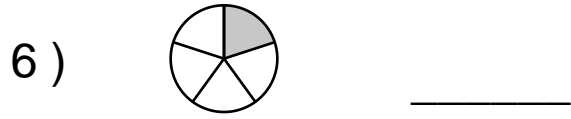
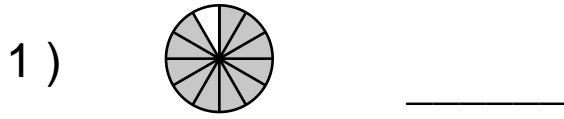
Name : \_\_\_\_\_

Score : \_\_\_\_\_

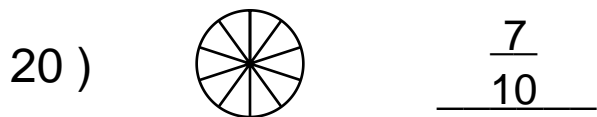
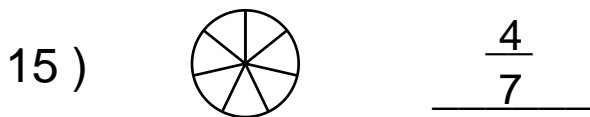
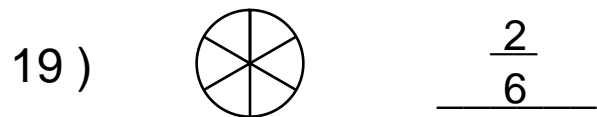
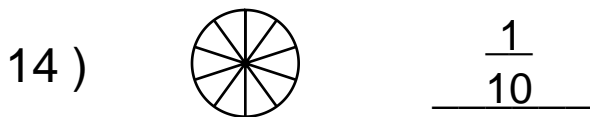
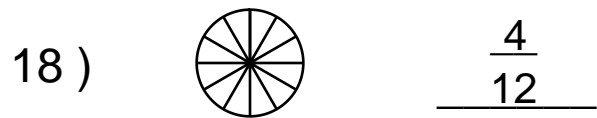
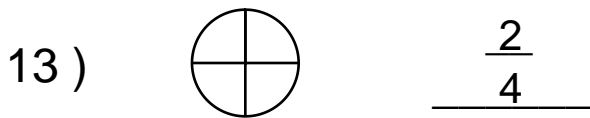
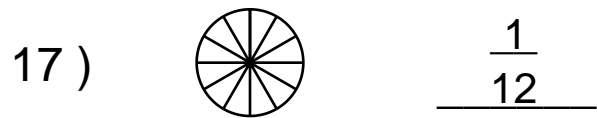
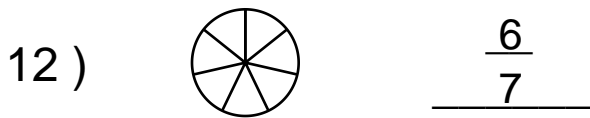
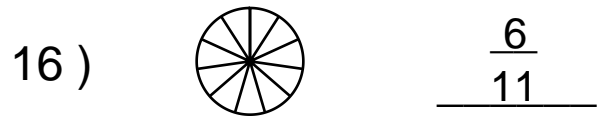
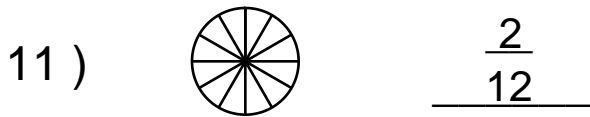
Teacher : \_\_\_\_\_

Date : \_\_\_\_\_

What is the Fraction of the Shaded Area ?



Shade the Figure with the Indicated Fraction.



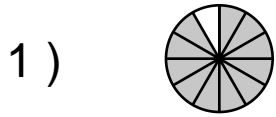
Name : \_\_\_\_\_

Score : \_\_\_\_\_

Teacher : \_\_\_\_\_

Date : \_\_\_\_\_

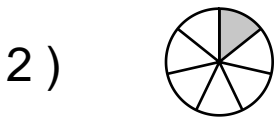
What is the Fraction of the Shaded Area ?



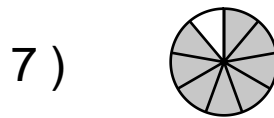
$\frac{11}{12}$



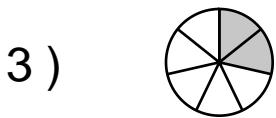
$\frac{1}{5}$



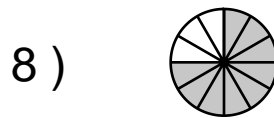
$\frac{1}{7}$



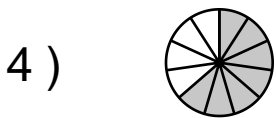
$\frac{8}{9}$



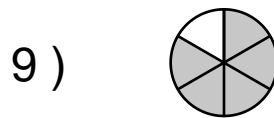
$\frac{2}{7}$



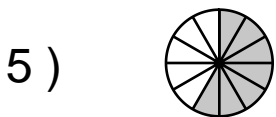
$\frac{9}{12}$



$\frac{7}{11}$



$\frac{5}{6}$



$\frac{7}{12}$



$\frac{4}{10}$

Shade the Figure with the Indicated Fraction.



$\frac{2}{12}$



$\frac{6}{11}$



$\frac{6}{7}$



$\frac{1}{12}$



$\frac{2}{4}$



$\frac{4}{12}$



$\frac{1}{10}$



$\frac{2}{6}$



$\frac{4}{7}$



$\frac{7}{10}$

