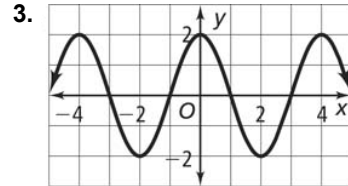
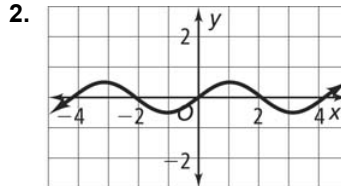
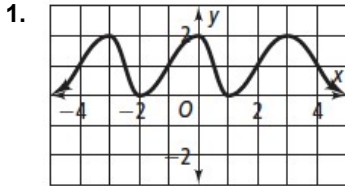


13-1 Practice

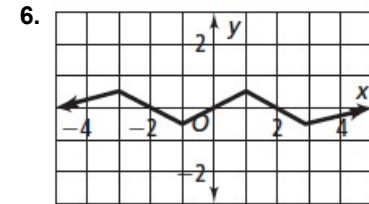
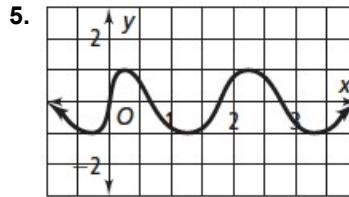
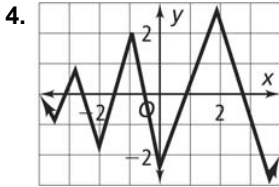
Exploring Periodic Data

Form G

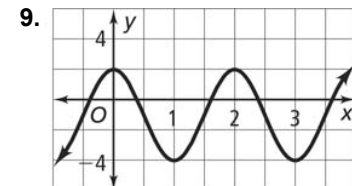
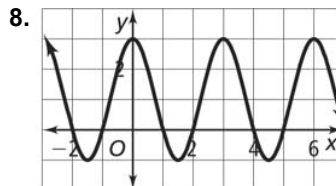
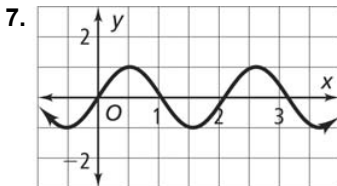
Name one cycle in two different ways. Then determine the period of the function.



Determine whether each function *is* or *is not* periodic. If it is, find the period.



Find the amplitude of each periodic function.



Sketch the graph of a sound wave with the given period and amplitude.

10. period 0.03, amplitude 2

11. period 0.006, amplitude 3