

8.1 - 8.2 Review

State if the three side lengths form an acute, obtuse, or right triangle.

1) 6 yd, 8 yd, 10 yd

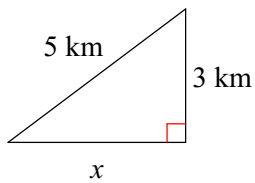
2) 6 km, 12 km, 13 km

3) 2 mi, 12 mi, 13 mi

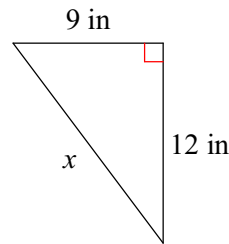
4) 5 in, 12 in, 13 in

Find the missing side lengths. Leave your answers as radicals in simplest form.

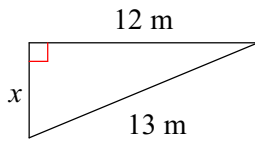
5)



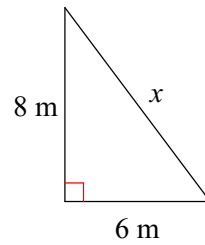
6)



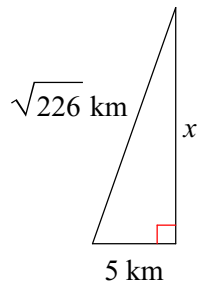
7)



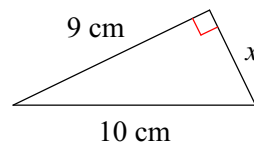
8)



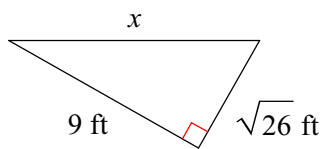
9)



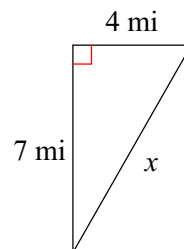
10)



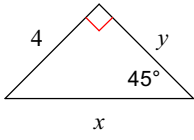
11)



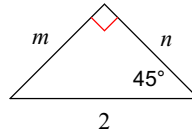
12)



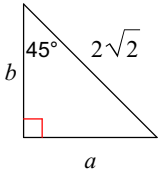
13)



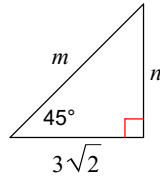
14)



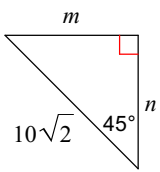
15)



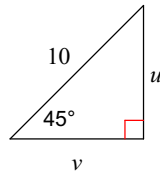
16)



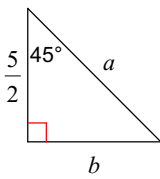
17)



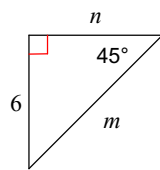
18)



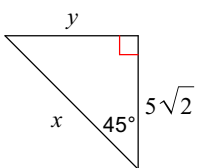
19)



20)



21)



22)

